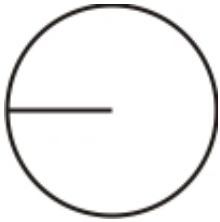


Circle Worksheet 1

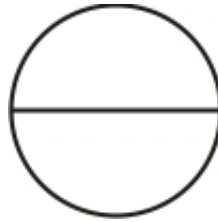
1a.



$$r = 1.4 \text{ cm}$$

Calculate the diameter of the circle.

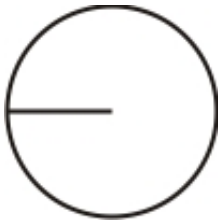
1b.



$$d = 7.9 \text{ mm}$$

Calculate the radius of the circle.

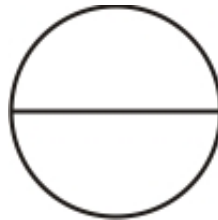
2a.



$$r = 4.2 \text{ mm}$$

Calculate the diameter of the circle.


2b.



$$d = 7.8 \text{ cm}$$

Calculate the radius of the circle.

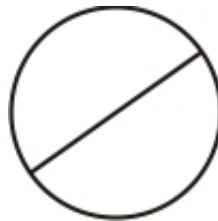
3a.



$$d = 6.9 \text{ ft}$$

Calculate the radius of the circle.

3b.



$$d = 6.6 \text{ in}$$

Calculate the radius of the circle.

[Answer Key](#)

Copying permission: *You are free to copy this worksheet to any number of students for their mathematics work. Do not distribute on websites, books, or any such material without permission.*

Copyright 2003-2013 Maria Miller / HomeschoolMath.net free worksheets